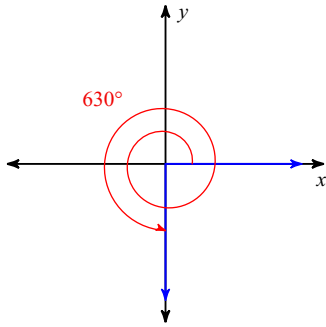


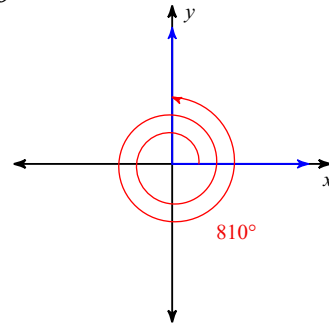
Unit 6 Day 9 Warm Up

Find the exact value of each trigonometric function.

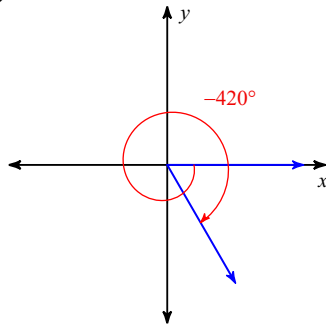
1) $\tan \theta$



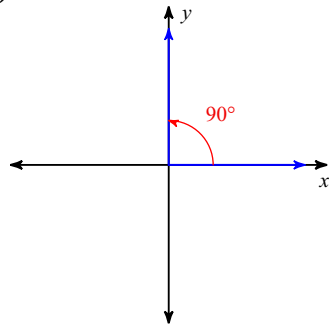
2) $\cos \theta$



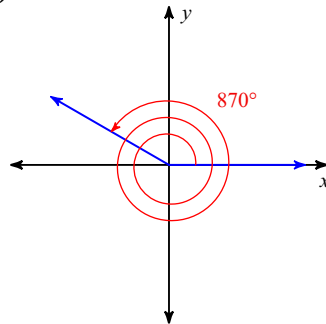
3) $\csc \theta$



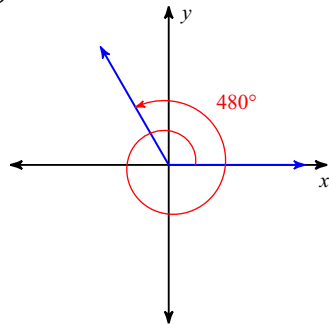
4) $\cot \theta$



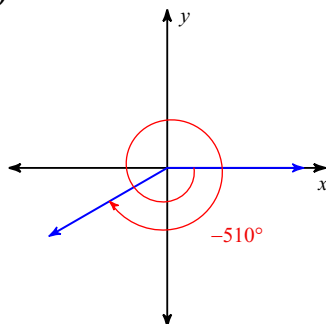
5) $\cos \theta$



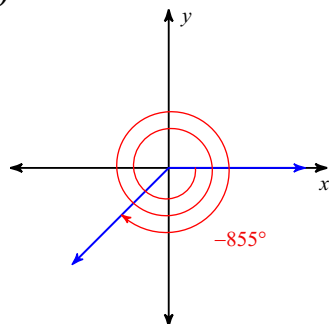
6) $\cot \theta$



7) $\csc \theta$



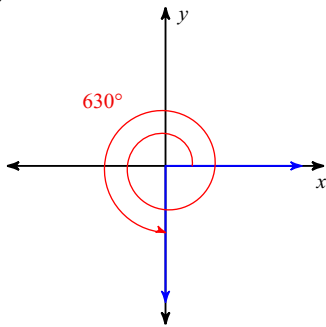
8) $\tan \theta$



Unit 6 Day 9 Warm Up

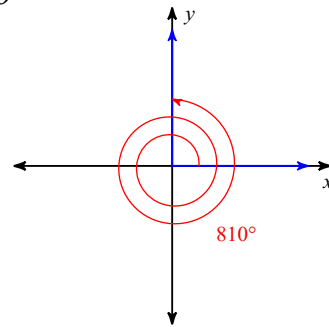
Find the exact value of each trigonometric function.

1) $\tan \theta$



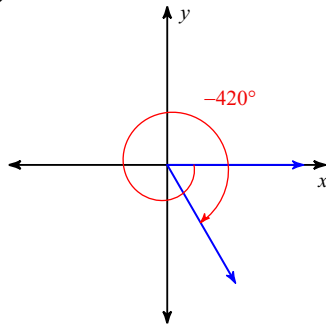
Undefined

2) $\cos \theta$



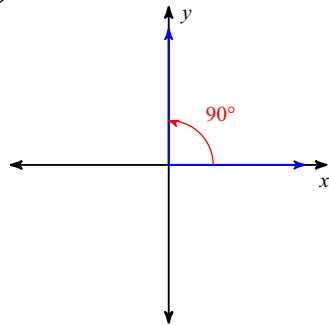
0

3) $\csc \theta$



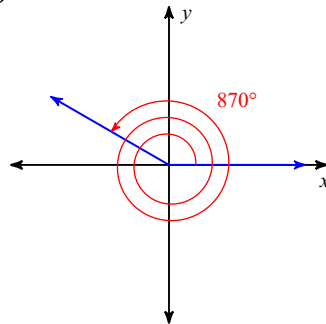
$$-\frac{2\sqrt{3}}{3}$$

4) $\cot \theta$



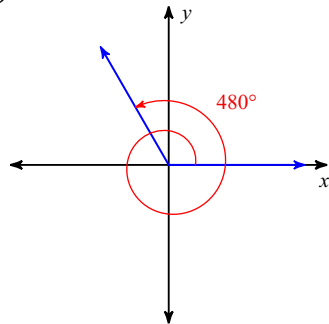
0

5) $\cos \theta$



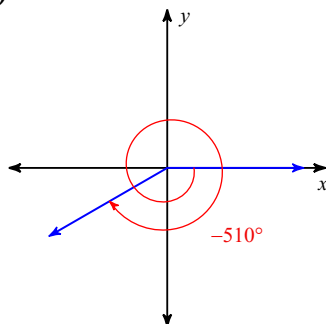
$$-\frac{\sqrt{3}}{2}$$

6) $\cot \theta$



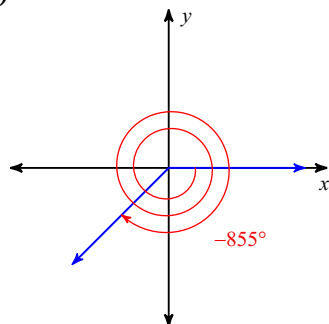
$$-\frac{\sqrt{3}}{3}$$

7) $\csc \theta$



-2

8) $\tan \theta$



1