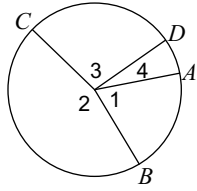


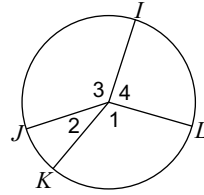
Unit 6 Day 2 Warm Up

If an angle is given, name the arc it makes. If an arc is given, name its central angle.

1) \widehat{ABD}

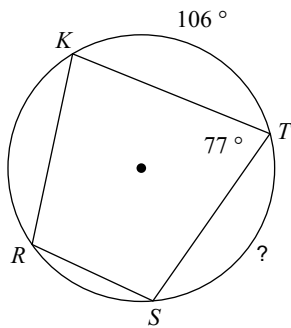


2) Major arc for $\angle 2$

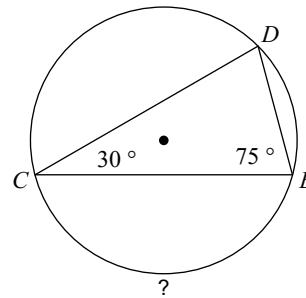


Find the measure of the arc or angle indicated.

3)

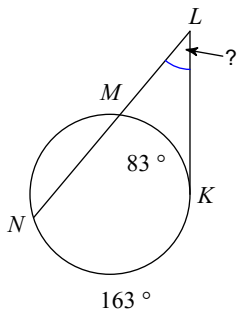


4)

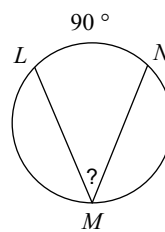


Find the measure of the arc or angle indicated. Assume that lines which appear tangent are tangent.

5)



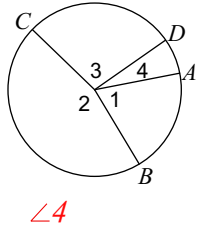
6)



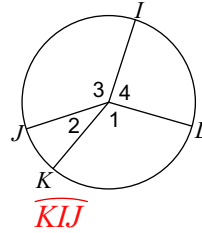
Unit 6 Day 2 Warm Up

If an angle is given, name the arc it makes. If an arc is given, name its central angle.

1) \widehat{ABD}

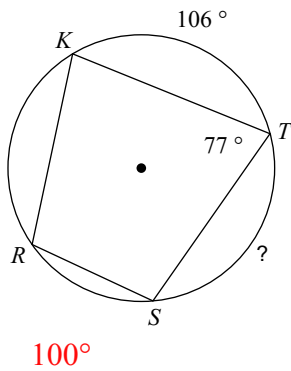


2) Major arc for $\angle 2$

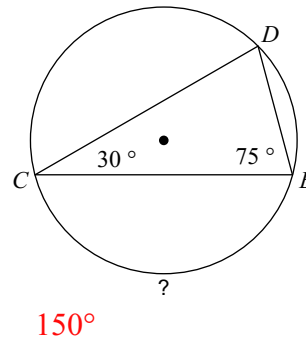


Find the measure of the arc or angle indicated.

3)

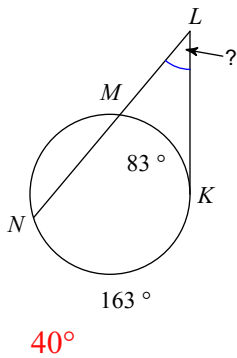


4)



Find the measure of the arc or angle indicated. Assume that lines which appear tangent are tangent.

5)



6)

