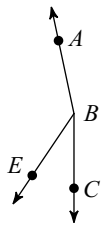
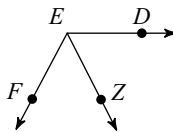


Day 1 Warm Up

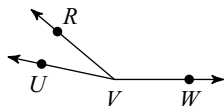
- 1) $m\angle CBA = 168^\circ$ and $m\angle EBA = 134^\circ$.
Find $m\angle CBE$.



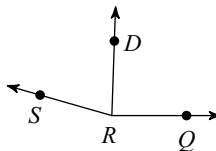
- 2) Find $m\angle ZEF$ if $m\angle DEF = 118^\circ$
and $m\angle DEZ = 63^\circ$.



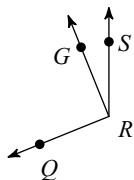
- 3) Find $m\angle RVW$ if $m\angle UVR = 28^\circ$
and $m\angle UVW = 168^\circ$.



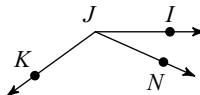
- 4) Find $m\angle DRQ$ if $m\angle SRQ = 164^\circ$
and $m\angle SRD = 76^\circ$.



- 5) Find $m\angle QRS$ if $m\angle QRG = 90^\circ$
and $m\angle GRS = 22^\circ$.

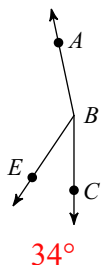


- 6) $m\angle IJK = 144^\circ$ and $m\angle NJK = 120^\circ$.
Find $m\angle IJN$.



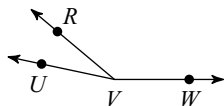
Day 1 Warm Up

- 1) $m\angle CBA = 168^\circ$ and $m\angle EBA = 134^\circ$.
Find $m\angle CBE$.



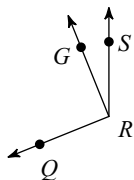
34°

- 3) Find $m\angle RVW$ if $m\angle UVR = 28^\circ$
and $m\angle UVW = 168^\circ$.



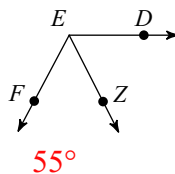
140°

- 5) Find $m\angle QRS$ if $m\angle QRG = 90^\circ$
and $m\angle GRS = 22^\circ$.



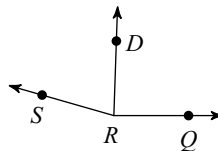
112°

- 2) Find $m\angle ZEF$ if $m\angle DEF = 118^\circ$
and $m\angle DEZ = 63^\circ$.



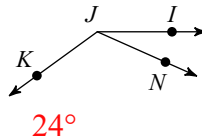
55°

- 4) Find $m\angle DRQ$ if $m\angle SRQ = 164^\circ$
and $m\angle SRD = 76^\circ$.



88°

- 6) $m\angle IJK = 144^\circ$ and $m\angle NJK = 120^\circ$.
Find $m\angle IJN$.



24°