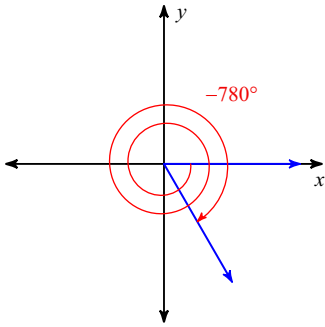


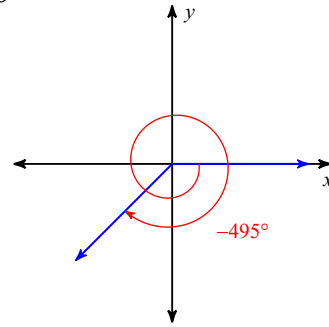
Unit 6 Day 10 Warm Up

Find the exact value of each trigonometric function.

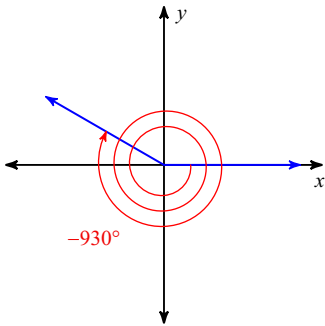
1) $\cos \theta$



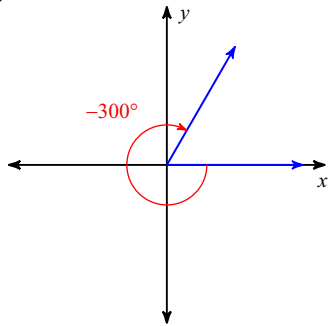
2) $\cos \theta$



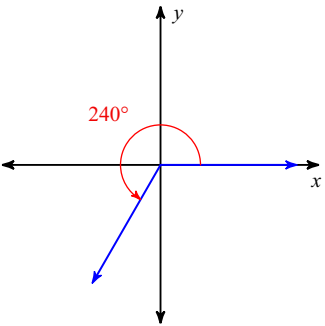
3) $\cos \theta$



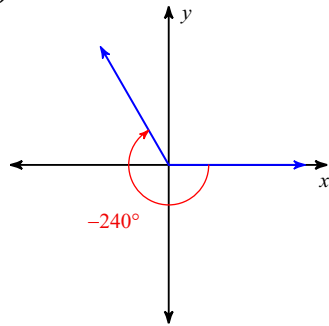
4) $\sin \theta$



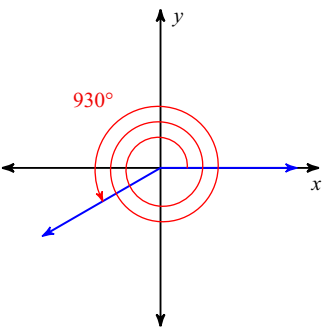
5) $\cot \theta$



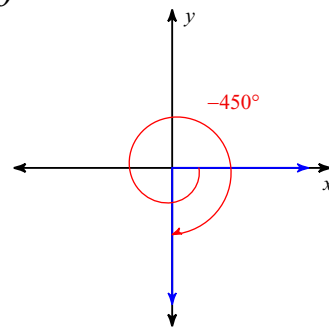
6) $\cot \theta$



7) $\tan \theta$



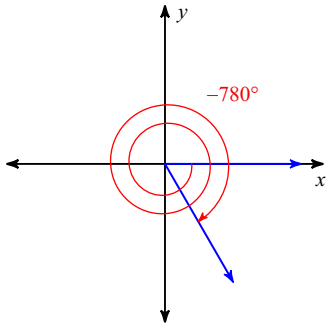
8) $\cos \theta$



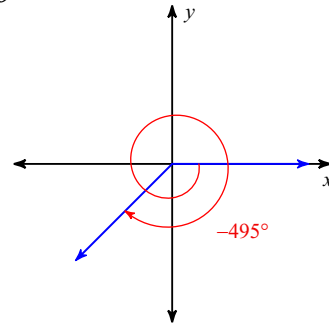
Unit 6 Day 10 Warm Up

Find the exact value of each trigonometric function.

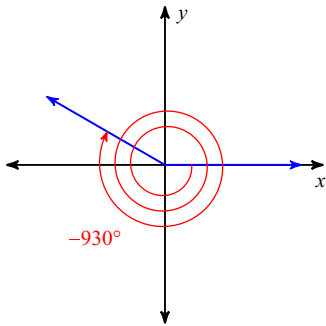
1) $\cos \theta$ $\frac{1}{2}$



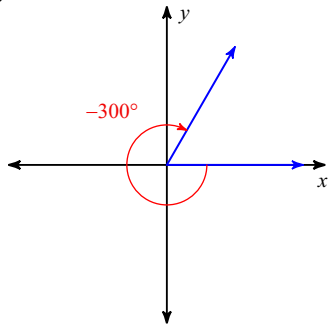
2) $\cos \theta$ $-\frac{\sqrt{2}}{2}$



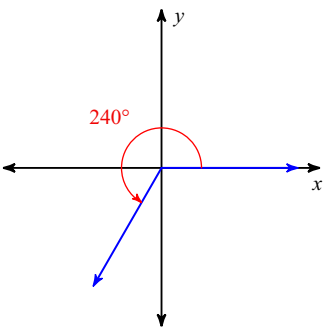
3) $\cos \theta$ $-\frac{\sqrt{3}}{2}$



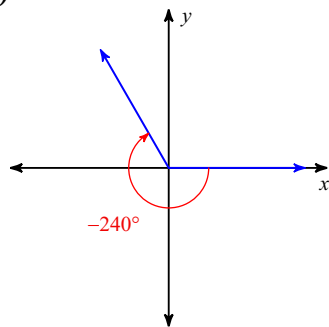
4) $\sin \theta$ $\frac{\sqrt{3}}{2}$



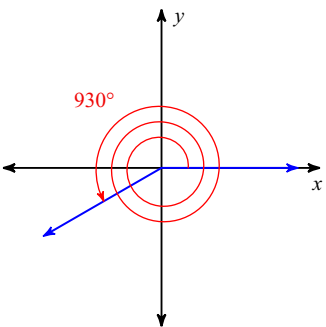
5) $\cot \theta$ $\frac{\sqrt{3}}{3}$



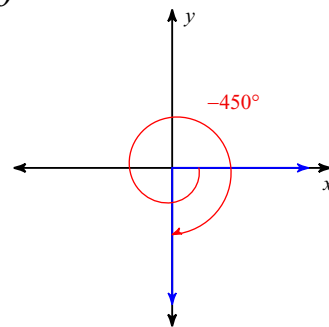
6) $\cot \theta$ $-\frac{\sqrt{3}}{3}$



7) $\tan \theta$ $\frac{\sqrt{3}}{3}$



8) $\cos \theta$



0