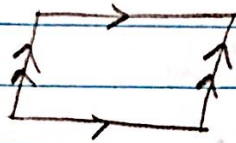
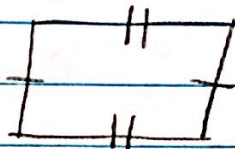


## 5 ways to prove quad = parallelogram


1. both pairs opp. sides are parallel



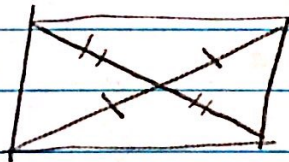
2. both pairs opp. sides are congruent



3. one pair of opp. sides are parallel + congruent



4. diagonals bisect each other



5. both pairs of opp. angles are congruent

